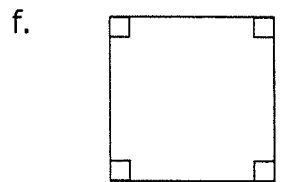
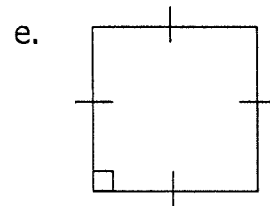
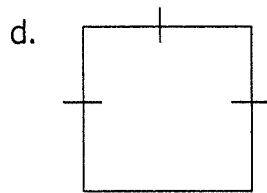
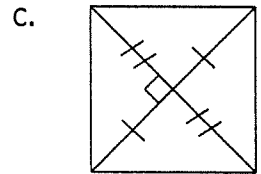
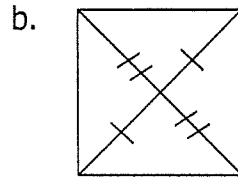
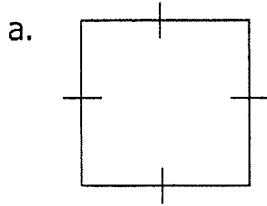


1. Identify the quadrilateral, be as specific as you can. Justify your answer.



Geometry (H)

Section 5.4 – Special Parallelograms

Directions: Graph each quadrilateral then identify whether it is a: rectangle, rhombus, square, or parallelogram. You must use slope and/or distance to verify.

1. D(-2,2)    O(2,5)    G(2,0)    S(-2,-3)

2. M(-1,4)    A(-3,2)    R(2, -3)    S(4,-1)